

IB Security Assistant & MTS

Previous Year Paper
24 Mar, 2023 Shift 1

Test Date	24/03/2023
Test Time	9:00 AM - 10:00 AM
Subject	Security Assistant & Multi Tasking Staff

Section : General Awareness

Q.1 Cadmium pollution causes a disease called ‘Emphysema’. Which organ in the human body is/are primarily affected in ‘Emphysema’?

- Ans ☒ 1. Kidneys
- ☒ 2. Lungs
- ☒ 3. Liver
- ☒ 4. Heart

Question ID : 630680194232
Status : Answered
Chosen Option : 2

Q.2 The poses in which classical dance form are called Karanas?

- Ans ☒ 1. Odissi
- ☒ 2. Kathakali
- ☒ 3. Kathak
- ☒ 4. Bharatanatyam

Question ID : 630680194220
Status : Not Answered
Chosen Option : --

Q.3 As per the World Bank data, what was the population of India at the end of 2021?

- Ans ☒ 1. 1.69 billion
- ☒ 2. 1.49 billion
- ☒ 3. 1.59 billion
- ☒ 4. 1.39 billion

Question ID : 630680194214
Status : Answered
Chosen Option : 4

Q.4 'Baithakichi' is a type of which folk music form in India?

- Ans
- ☐ 1. Bihugeet
 - ☐ 2. Pandavani
 - ☐ 3. Bhatiali
 - ☒ 4. Lavani

Question ID : 630680194218
Status : Not Answered
Chosen Option : --

Q.5 Which of the following electromagnetic waves have the highest wavelength?

- Ans
- ☐ 1. Infrared waves
 - ☐ 2. X-rays
 - ☐ 3. Ultraviolet waves
 - ☒ 4. Microwaves

Question ID : 630680194231
Status : Not Answered
Chosen Option : --

Q.6 The folk-dance form 'Gaur Maria' is native of which state in India?

- Ans
- ☐ 1. Goa
 - ☐ 2. West Bengal
 - ☐ 3. Gujarat
 - ☒ 4. Chhattisgarh

Question ID : 630680194227
Status : Not Answered
Chosen Option : --

Q.7 HCFC-141 b is one of the most powerful ozone-depleting chemicals after Chlorofluorocarbons (CFCs). What is the full form of HCFC?

- Ans
- ☐ 1. Hydro ChloroFluoro Carbene
 - ☐ 2. Hydro CyanoFluoro Carbon
 - ☐ 3. HeptaChloroFluoro Carbon
 - ☒ 4. Hydro ChloroFluoro Carbon

Question ID : 630680194219
Status : Answered
Chosen Option : 4

Q.8 Which of the following is a non-essential amino acid as it can be made by the human body?

- Ans
- ☒ 1. Proline
 - ☐ 2. Methionine
 - ☐ 3. Threonine
 - ☐ 4. Valine

Question ID : 630680194222
Status : Not Answered
Chosen Option : --

Q.9 Which of the following is a weakest acid?

- Ans ☒ 1. Perchloric acid
☒ 2. Ethanoic acid
☒ 3. Hydrochloric acid
☒ 4. Nitric acid

Question ID : 630680194230
Status : Answered
Chosen Option : 2

Q.10 Traditional folk musicians 'Manganiyar' and 'Langa' are related to which state of India from following?

- Ans ☒ 1. Tamil Nadu
☒ 2. Odisha
☒ 3. Rajasthan
☒ 4. Assam

Question ID : 630680194228
Status : Not Answered
Chosen Option : --

Q.11 Who made history in the women's 100 m hurdles and became the first Indian woman to run a sub-13s time to win the gold medal at the Nation Games 2022?

- Ans ☒ 1. Nandini Agasara
☒ 2. V Surekha
☒ 3. Jyothi Yarraji
☒ 4. Rosy Meena Paulraj

Question ID : 630680194225
Status : Not Answered
Chosen Option : --

Q.12 In terms of ecology, an organism that can tolerate a wide range of temperatures is referred to as_____.

- Ans ☒ 1. niche
☒ 2. euryhaline
☒ 3. eurythermal
☒ 4. stenohaline

Question ID : 630680194229
Status : Answered
Chosen Option : 1

Q.13 The disease 'Xerophthalmia' is caused in children due to deficiency of which vitamin in their diet?

- Ans ☒ 1. Vitamin B₁₂
☒ 2. Vitamin A
☒ 3. Vitamin D
☒ 4. Vitamin C

Question ID : 630680194221
Status : Not Answered
Chosen Option : --

Q.14 NITI Aayog has constructed the SDG India Index spanning across 13 out of 17 SDGs as prescribed by UNO. Which of the following SDG goals of UNO is left out in the SDG India Index?

- Ans
- ☒ 1. Goal 5
 - ☒ 2. Goal 9
 - ☒ 3. Goal 7
 - ☒ 4. Goal 12

Question ID : 630680194216
Status : Not Answered
Chosen Option : --

Q.15 As per the India Discrimination Report 2022, the Labour Force Participation Rate (LFPR) of women in India is just _____ percent in 2021.

- Ans
- ☒ 1. 10%
 - ☒ 2. 25%
 - ☒ 3. 20%
 - ☒ 4. 15%

Question ID : 630680194215
Status : Not Answered
Chosen Option : --

Q.16 India's overall score on the NITI Aayog Sustainable Development Goals (SDG) India Index and Dashboard in 2020-21 is _____.

- Ans
- ☒ 1. 65
 - ☒ 2. 66
 - ☒ 3. 60
 - ☒ 4. 64

Question ID : 630680194223
Status : Not Answered
Chosen Option : --

Q.17 International Agency for Research on Cancer (IARC) has classified radiofrequency electromagnetic fields as possibly carcinogenic to humans. In which category of carcinogens radio frequency of mobiles phones is kept?

- Ans
- ☒ 1. Group 4
 - ☒ 2. Group 2B
 - ☒ 3. Group 2A
 - ☒ 4. Group 3

Question ID : 630680194233
Status : Not Answered
Chosen Option : --

Q.18 The inception of Sanchi as a sacred centre was attributed to the Mauryan Emperor Ashoka in the _____.

- Ans
- ☒ 1. 5th century BCE
 - ☒ 2. 3rd century BCE
 - ☒ 3. 4th century BCE
 - ☒ 4. 6th century BCE

Question ID : 630680194226
Status : Not Answered
Chosen Option : --

Q.19 Which State/Team bagged the highest number of gold medals at the 36th National Games of India?

- Ans
- ☒ 1. Tamil Nadu
 - ☒ 2. Haryana
 - ☒ 3. Services team
 - ☒ 4. Karnataka

Question ID : 630680194217
Status : Not Answered
Chosen Option : --

Q.20 Which state is the host for the 5th Khelo India Youth Games-2022?

- Ans
- ☒ 1. Madhya Pradesh
 - ☒ 2. Haryana
 - ☒ 3. Goa
 - ☒ 4. Telangana

Question ID : 630680194224
Status : Answered
Chosen Option : 1

Section : Quantitative Aptitude

Q.1 A big spherical besan laddoo of radius 810 cm is broken into smaller spherical laddoos of radius 90 cm. Find the ratio of the total surface area of all the small laddoos taken together to the surface area of the big laddoo.

- Ans
- ☒ 1. 1 : 9
 - ☒ 2. 8 : 3
 - ☒ 3. 9 : 1
 - ☒ 4. 2 : 7

Question ID : 630680194241
Status : Answered
Chosen Option : 1

Q.2 During Diwali sale, company A gives 'buy 4 sweaters and get 2 free' offer, company B gives 'buy 2 sweaters and get 3 free' offer, and company C gives a discount of 5%.

Which of the following is true?

- 1. A gives the best offer for the customer.
- 2. B gives the best offer for the customer.
- 3. Both A and B actually give the same offer.
- 4. C gives the best offer.

- Ans
- ☒ 1. 4
 - ☒ 2. 2
 - ☒ 3. 3
 - ☒ 4. 1

Question ID : 630680194247
Status : Not Answered
Chosen Option : --

Q.3 A and B together can knit a sweater in 255 hours, B and C can knit it together in 170 hours, while A and C can knit it together in 204 hours. How many hours will A, B and C together take to knit the sweater?

- Ans ☒ 1. 153
☒ 2. 136
☒ 3. 102
☒ 4. 119

Question ID : 630680194248

Status : Answered

Chosen Option : 2

Q.4 A sum of money invested on compound interest for 2 years at 20% interest per annum would fetch ₹482 more as interest if the interest is compounded half-yearly than yearly. What is the sum invested?

- Ans ☒ 1. ₹20,000
☒ 2. ₹22,210
☒ 3. ₹19,120
☒ 4. ₹24,100

Question ID : 630680194244

Status : Not Attempted and
Marked For Review

Chosen Option : --

Q.5 The ratio of the present ages of Rani and Rohan is 3 : 4. After 3 years the ratio will become 4 : 5. The ratio of their ages 24 years from now will be _____.

- Ans ☒ 1. 11 : 12
☒ 2. 12 : 13
☒ 3. 13 : 14
☒ 4. 10 : 11

Question ID : 630680194252

Status : Answered

Chosen Option : 1

Q.6 Find the average of all the prime numbers that lie between 70 and 100.

- Ans ☒ 1. 80
☒ 2. 82
☒ 3. 84
☒ 4. 86

Question ID : 630680194253

Status : Answered

Chosen Option : 2

Q.7 What profit per cent is made by selling an article at a certain price if by selling at $\frac{4}{5}$ th of that price there is a loss of 12%?

- Ans
- ☒ 1. 5%
 - ☒ 2. 3%
 - ☒ 3. 12%
 - ☒ 4. 10%

Question ID : 630680194239
Status : Not Answered
Chosen Option : --

Q.8 Divide 2310 people into three parties such that half of the number in the first party, one-third of the number in the second party and one-sixth of the number in the third party, are all equal.

- Ans
- ☒ 1. 420, 630, 1260
 - ☒ 2. 1200, 690, 420
 - ☒ 3. 410, 640, 1260
 - ☒ 4. 230, 820, 1260

Question ID : 630680194242
Status : Answered
Chosen Option : 1

Q.9 85 g of sugar solution has 30% sugar in it. The quantity of sugar that should be added to the solution to make the quantity of the sugar 65% in the solution is _____.

- Ans
- ☒ 1. 85 g
 - ☒ 2. 110 g
 - ☒ 3. 90 g
 - ☒ 4. 100 g

Question ID : 630680194236
Status : Not Answered
Chosen Option : --

Q.10 A boat covers a distance of 1 km against the current of the stream in half an hour and a distance of 3 km in the direction of the current in 30 minutes. How long will it take for the boat to go 8 km in still water?

- Ans
- ☒ 1.
 - ☒ 2. 2 hours 15 minutes
 - ☒ 3. 2 hours 25 minutes
 - ☒ 4. 2 hours

Question ID : 630680194238
Status : Answered
Chosen Option : 4

Q.11 Which is the smallest 5-digit number that is divisible by each of 54, 120 and 96?

- Ans ☒ 1. 14260
☒ 2. 12960
☒ 3. 18280
☒ 4. 17280

Question ID : 630680194251
Status : Answered
Chosen Option : 2

Q.12 Evaluate the given expression.

$$\left[\frac{0.36}{0.012 \text{ of } 0.4} \right] \times 0.5$$

- Ans ☒ 1. 15
☒ 2. 0.18
☒ 3. 5.45
☒ 4. 37.5

Question ID : 630680194234
Status : Answered
Chosen Option : 4

Q.13 In a seminar, the number of participants in music, physical education and fine arts are 216, 96 and 168, respectively. Find the minimum number of rooms required if each room has the same number of participants and no room has participants from more than one stream seated in it.

- Ans ☒ 1. 20
☒ 2. 12
☒ 3. 24
☒ 4. 48

Question ID : 630680194246
Status : Answered
Chosen Option : 3

Q.14 If the selling price of a toy is $\frac{3}{5}$ of its cost price, then the loss percent is _____.

- Ans ☒ 1. 16%
☒ 2. 15%
☒ 3. 25%
☒ 4. 40%

Question ID : 630680194250
Status : Answered
Chosen Option : 4

Q.15 At what rate percent per annum will a sum of money become 5 times of itself in 8 years on simple interest?

- Ans ☒ 1. 30%
☒ 2. 50%
☒ 3. 20%
☒ 4. 40%

Question ID : 630680194243
Status : Answered
Chosen Option : 2

Q.16 If V and S denote the volume and the total surface area of a cuboid (of sides a, b and c) respectively, then which of the following is true?

- Ans ☒ 1. $(1/V) = (2/S)(1/a + 1/b + 1/c)$
☒ 2. $0 = (2/S)(1/a + 1/b + 1/c)$
☒ 3. $(1/V) = (2/S)(1/a - 1/b - 1/c)$
☒ 4. $(1/V) = (1/S)(2 + 1/b + 1/c)$

Question ID : 630680194245
Status : Answered
Chosen Option : 1

Q.17 If the HCF of x and 117 is expressible in the form $2x - 117$, then which of the following options can be a value of x?

- Ans ☒ 1. 65
☒ 2. 75
☒ 3. 62
☒ 4. 91

Question ID : 630680194235
Status : Not Answered
Chosen Option : --

Q.18 A book needs to be typed. A types it in 15 days. B types it in 12 days. C types in 20 days. D types in 8 days. If A and D work together as team VENUS, B and C work as team MERCURY, and A and C work as team MARS, which of these three teams will complete typing the book first?

- Ans ☒ 1. MERCURY
☒ 2. VENUS
☒ 3. MARS
☒ 4. All teams take the same time

Question ID : 630680194240
Status : Not Answered
Chosen Option : --

Q.19 The weightage of 5 tests in a class and the marks scored by Ritu in those tests are as follows. What is the weighted average of the percentages she obtained in the five tests?

Score/Max	Weightage
12/20	15%
16/20	12%
40/50	30%
80/100	10%
14/20	33%

- Ans  1. 65.4%
 2. 73.7%
 3. 82.4%
 4. 77.6%

Question ID : 630680194249
Status : Not Answered
Chosen Option : --

Q.20 The volumes of three containers are in the ratio of 4 : 5 : 6. They are full of mixtures of petrol to kerosene in the ratios of (3 : 1), (3 : 2) and (5 : 1), respectively. The entire quantities of these mixtures from all these three containers are poured into a fourth container. The ratio of petrol to kerosene in the fourth container is _____.

- Ans  1. 12 : 5
 2. 11 : 4
 3. 5 : 2
 4. 3 : 1

Question ID : 630680194237
Status : Not Answered
Chosen Option : --

Section : Numerical,Logical,Analytical Ability & Reasoning

Q.1 Select the number from among the given options that can replace the question mark (?) in the following series.

20, 25, 24, 30, 32, 35, ?

- Ans  1. 37
 2. 38
 3. 45
 4. 44

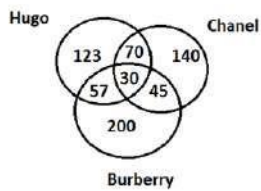
Question ID : 630680194270
Status : Answered
Chosen Option : 4

Q.2 K, R, I, H, G and F are six candidates who are selected for the programme of M.Ed of 'XYZ' university. Each has to join in different months of the same year viz. January, April, June, August, September and December. H has to join in April. Only K has to join after I. F has to join immediately after G. Who has to join in January?

- Ans ☒ 1. I
☒ 2. R
☒ 3. K
☒ 4. G

Question ID : 630680194257
Status : Answered
Chosen Option : 2

Q.3 Study the given diagram carefully and answer the question that follows. The numbers in different sections indicate the number of women using different brands of perfume.



How many such women are there who use both Chanel and Hugo brands only?

- Ans ☒ 1. 70
☒ 2. 263
☒ 3. 30
☒ 4. 100

Question ID : 630680194258
Status : Answered
Chosen Option : 1

Q.4 Four letter-clusters have been given, out of which three are alike in some manner, and one is different. Select the one that is different.



(Note: the letter-clusters are not to be treated as meaningful words)

- Ans ☒ 1. RVTX
☒ 2. GKIM
☒ 3. MQOT
☒ 4. BFDH

Question ID : 630680194269
Status : Answered
Chosen Option : 3

Q.5 'A & B' means 'A is the father of B'
'A # B' means 'A is the son of B'
'A ^ B' means 'A is the brother of B's father'
'A @ B' means 'A is the wife of B'
'A % B' means 'A is the mother of B'

How is G related to K in the following expression?
'G ^ H # I @ J & K'

- Ans  1. Father's father
 2. Son
 3. Father's brother
 4. Brother's son



Question ID : 630680194266

Status : Not Attempted and Marked For Review

Chosen Option : --

Q.6 If '-' means '+', 'x' means '+', '÷' means 'x' and '+' means '-' what will be the value of the following expression?

$$[(7 + 3) \times (3 \times 1)] - (1 \div 2) \div 2$$

- Ans  1. 8
 2. 1
 3. 4
 4. 2



Question ID : 630680194273

Status : Answered

Chosen Option : 1

Q.7 Select the alphanumeric-cluster from among the given options that can replace the question mark (?) in the following series.

4N, 5K, 12H, 39E, 160B, ?





- Ans  1. 292X
 2. 805X
 3. 805Y
 4. 350Z

Question ID : 630680194260

Status : Answered

Chosen Option : 3

Q.8 Seven members A, B, C, D, E, F and G of a certain department, have a function to attend on a different day of a week, starting from Monday to Sunday of the same week. B has to attend the function on Tuesday. E has to attend the function immediately before A. G has to attend the function on Sunday. Only F has to attend the function between A and C. D has to attend the function on one of the days before B, A or C. Who has to attend the function on Thursday?

- Ans  1. F
 2. A
 3. C
 4. E

Question ID : 630680194256

Status : Not Attempted and Marked For Review

Chosen Option : --

Q.9 Arun walks 5 m south from his office, turns left and walks 3 m, again turns left and walks 13 m, then turns left and walks 3 m to reach the grocery shop. In which direction and how far is Arun from his office?

- Ans ☒ 1. 10 m, North-East
- ☒ 2. 8 m, North
- ☒ 3. 14 m, North-East
- ☒ 4. 10 m, South-West

Question ID : 630680194265
Status : Answered
Chosen Option : 2

Q.10 Each of the letters in the word 'ADMIT' is arranged in alphabetical order. How many letters are there in the English alphabetical series between the letter which is second from the left and the one which is second from the right?

- Ans ☒ 1. 10
- ☒ 2. 6
- ☒ 3. 8
- ☒ 4. 9

Question ID : 630680194261
Status : Not Answered
Chosen Option : --

Q.11 In a certain code language, 'ACTIVE' is coded as 'CBSKUG', and 'MEMBER' is coded as 'LGLAGQ'. How will 'LEAGUE' be coded in that language?

- Ans ☒ 1. KGCFSG
- ☒ 2. KGCFWG
- ☒ 3. KGCIWG
- ☒ 4. KGYFWG

Question ID : 630680194263
Status : Not Answered
Chosen Option : --

Q.12 Select the option that is related to the fifth letter-cluster in the same way as the second letter-cluster is related to the first letter-cluster and the fourth letter-cluster is related to the third letter-cluster.

EXAM : FWBL :: ROOM : QPPL :: TEST : ?

- Ans ☒ 1. SFRU
- ☒ 2. UDTs
- ☒ 3. SFRS
- ☒ 4. SDRS

Question ID : 630680194267
Status : Answered
Chosen Option : 2

Q.13 Refer to the given number, symbol series and answer the question that follows.

(Left) 3 * @ 5 % 3 + = 3 3 % 8 7 & 5 \$ 7 5 & # * 8 2 @ 5(Right)

How many such symbols are there (from left to right) which are immediately preceded by a number and also immediately followed by a number?

- Ans ☒ 1. 4
☒ 2. 5
☒ 3. 6
☒ 4. 7

Question ID : 630680194262
Status : Answered
Chosen Option : 2

Q.14 Seven teachers A, B, C, D, E, Y and Z are sitting in a straight row, facing north. Only A sits between E and D. Only B sits between Z and Y. Only C sits to the right of E. A is to the immediate left of E. Z does not sit at any extreme ends of the row. Who sits to the immediate left of B?

- Ans ☒ 1. D
☒ 2. Y
☒ 3. E
☒ 4. Z

Question ID : 630680194255
Status : Answered
Chosen Option : 2

Q.15 In a certain code language, 'GLASS' is coded as 'T0AHH', and 'METAL' is coded as 'NVTZO'. How will 'PAPER' be coded in that language?

- Ans ☒ 1. KZKVI
☒ 2. KZPVI
☒ 3. KYPUR
☒ 4. KZKVL

Question ID : 630680194264
Status : Answered
Chosen Option : 2

Q.16 Which two numbers should be interchanged to make the following equation correct?

$$4 \times 12 \div 9 + 7 - 10 = 0$$

- Ans ☒ 1. 4, 7
☒ 2. 9, 10
☒ 3. 9, 12
☒ 4. 9, 4

Question ID : 630680194272
Status : Answered
Chosen Option : 3

Q.17 Select the number from among the given options that can replace the question mark (?) in the following series.

3, 16, 51, 104, ?

- Ans ☒ 1. 207
☒ 2. 104
☒ 3. 209
☒ 4. 105

Question ID : 630680194271
Status : Answered
Chosen Option : 4

Q.18 Six lions N, O, P, Q, R and S are sitting in a straight row, facing north. Only Q sits to the left of R. N sits second to the left of O. S sits second to the right of P. O sits at an extreme end of the row. Which lion sits to the immediate right of N?

- Ans ☒ 1. R
☒ 2. O
☒ 3. S
☒ 4. P

Question ID : 630680194254
Status : Not Answered
Chosen Option : --

Q.19 Read the given statement and conclusions carefully. Decide which of the given conclusions is/are true based on the statement.

Statement:

$\forall < \infty = \mu \leq \odot > \Omega = \mathfrak{Q} > \beta$

Conclusions:

I. $\Omega > \mu$

II. $\infty < \mathfrak{Q}$

- Ans ☒ 1. Neither conclusion I nor II is true
☒ 2. Only conclusion I is true
☒ 3. Only conclusion II is true
☒ 4. Both conclusions I and II are true

Question ID : 630680194259
Status : Answered
Chosen Option : 1

Q.20 Select the triad which follows the same pattern as that followed by the two triads given below. Both triads follow the same pattern.

EV – GT – LO

PK – RI – WD

- Ans ☒ 1. QJ – SH – WE
☒ 2. OL – QJ – VE
☒ 3. BX – EV – JQ
☒ 4. BD – DF – IK

Question ID : 630680194268
Status : Answered
Chosen Option : 1

Q.1 Select the most appropriate option to fill in the blank.

My watch has begun _____ a few minutes every day.

- Ans ☒ 1. to be lost
☒ 2. lose
☒ 3. losing
☒ 4. lost

Question ID : 630680194277
Status : Answered
Chosen Option : 4

Q.2 Select the most appropriate meaning of the given idiom.

Out and out

- Ans ☒ 1. Complete
☒ 2. Eventually
☒ 3. Surprising
☒ 4. Easily

Question ID : 630680194283
Status : Answered
Chosen Option : 2

Q.3 Select the sentence with the correct punctuation and capitalisation.

- Ans ☒ 1. Her mother scolded her for watching YouTube all the time.
☒ 2. Her mother scolded her for, watching YouTube all the time.
☒ 3. Her mother scolded her for watching youtube all the time
☒ 4. Her mother, scolded her for watching, YouTube all the time.

Question ID : 630680194279
Status : Answered
Chosen Option : 3

Q.4 Select the INCORRECTLY spelt word.

- Ans ☒ 1. Sandal
☒ 2. Equal
☒ 3. Towal
☒ 4. Loyal

Question ID : 630680194286
Status : Answered
Chosen Option : 3

Q.5 Select the INCORRECTLY spelt word.

- Ans ☒ 1. Apathy
☒ 2. Apology
☒ 3. Apiary
☒ 4. Apostrofe

Question ID : 630680194287
Status : Answered
Chosen Option : 4

Q.6 Select the most appropriate option that can substitute the underlined word in the given sentence. If there is no need to substitute it, select 'No substitution required'

It rained strongly during the weekend.

- Ans ☒ 1. No substitution required
☒ 2. greatly
☒ 3. heavily
☒ 4. thickly

Question ID : 630680194291
Status : Answered
Chosen Option : 3

Q.7 Select the most appropriate meaning of the given word.

Anticipate

- Ans ☒ 1. Doubt
☒ 2. Hesitate
☒ 3. Expect
☒ 4. Question

Question ID : 630680194285
Status : Answered
Chosen Option : 2

Q.8 Select the most appropriate option to fill in the blank.

These days, we _____ for a new house.

- Ans ☒ 1. will look
☒ 2. are looking
☒ 3. look
☒ 4. had looked

Question ID : 630680194281
Status : Answered
Chosen Option : 2

Q.9 Select the most appropriate ANTONYM of the given word to fill in the blank.

Deliberately

He _____ broke the rules of the Ashram.

- Ans ☒ 1. possibly
☒ 2. intentionally
☒ 3. unknowingly
☒ 4. freely

Question ID : 630680194284
Status : Answered
Chosen Option : 3

Q.10 Sentences of a paragraph are given below in jumbled order. Arrange the sentences in the correct order to form a meaningful and coherent paragraph.

- A. My grandfather was a retired school teacher and an avid reader.
- B. Every night, under the dark sky with the twinkling stars, he would tell me many stories.
- C. He knew a vast number of Sanskrit texts by heart.
- D. These were stories from the history of India, the epics and whatever interesting things he had read that day in the papers and magazines.

Ans ☒ 1. ACBD

☒ 2. ADCB

☒ 3. ABCD

☒ 4. ABDC

Question ID : 630680194288
Status : Answered
Chosen Option : 1

Q.11 Select the correct punctuation mark to fill in the blanks.

Oh_____I didn't realise that.

Ans ☒ 1. exclamation mark (!)

☒ 2. full stop (.)

☒ 3. semicolon (;)

☒ 4. colon (:)

Question ID : 630680194278
Status : Answered
Chosen Option : 1

Q.12 Select the most appropriate option that can substitute the underlined segment in the given sentence. If there is no need to substitute it, select 'No substitution required'.

In February this year, Russia summoned war on Ukraine.

Ans ☒ 1. No substitution required

☒ 2. charged

☒ 3. assigned

☒ 4. declared

Question ID : 630680194293
Status : Answered
Chosen Option : 4

Q.13 Select the option that can substitute the underlined word in the given idiom. If no substitution is required, select 'No substitution required'.

A person of all trades is a master of none.

Ans ☒ 1. jack

☒ 2. knave

☒ 3. knight

☒ 4. No substitution required

Question ID : 630680194282
Status : Answered
Chosen Option : 1

Q.14 Select the most appropriate article to fill in the blank.

Soon after the visitor left, _____ artist came to his studio.

- Ans
- ☒ 1. an
 - ☒ 2. a
 - ☒ 3. No article required
 - ☒ 4. the

Question ID : 630680194274
Status : Answered
Chosen Option : 4

Q.15 Select the most appropriate option to fill in the blank.

In today's world, we are always bound _____ time.

- Ans
- ☒ 1. by
 - ☒ 2. with
 - ☒ 3. from
 - ☒ 4. through

Question ID : 630680194276
Status : Answered
Chosen Option : 2

Q.16 Select the most appropriate option to fill in the blank.

I _____ your book by Saturday.

- Ans
- ☒ 1. am returning
 - ☒ 2. have returned
 - ☒ 3. will return
 - ☒ 4. return

Question ID : 630680194280
Status : Answered
Chosen Option : 3

Q.17 Select the most appropriate option to fill in the blanks.

When Davis reached his aunt's place, he was _____ tired and weak. His aunt told him to catch _____ sleep.

- Ans
- ☒ 1. felt; much
 - ☒ 2. feels; many
 - ☒ 3. feeling; some
 - ☒ 4. feel; any

Question ID : 630680194290
Status : Answered
Chosen Option : 3

Q.18 Select the most appropriate option that can substitute the underlined word in the given sentence. If there is no need to substitute it, select 'No substitution required'.

Then the doctor took the driver's seat and they moved off along the white, turning road.

- Ans ☒ 1. crooked
☒ 2. twisting
☒ 3. winding
☒ 4. No substitution required

Question ID : 630680194292
Status : Answered
Chosen Option : 1

Q.19 Select the most appropriate option to fill in the blank.

Dr. Abdul Kalam, the former President of India, was also _____ great scientist.

- Ans ☒ 1. No article required
☒ 2. the
☒ 3. an
☒ 4. a

Question ID : 630680194275
Status : Answered
Chosen Option : 4

Q.20 Sentences of a paragraph are given below in jumbled order. Arrange the sentences in the correct order to form a meaningful and coherent paragraph.

- A. Her style was easy to read and very convincing.
B. Her stories usually dealt with complex psychological problems in the lives of ordinary people and were always very interesting.
C. Triveni was a very popular writer in the Kannada language.
D. She was a wonderful writer.

- Ans ☒ 1. CDAB
☒ 2. ADBC
☒ 3. BDAC
☒ 4. DACB

Question ID : 630680194289
Status : Answered
Chosen Option : 1

Section : General Studies

Q.1 In which year did Jayaprakash Narayan escape from Hazaribagh Prison and joined the Quit India Movement?

- Ans ☒ 1. 1942
☒ 2. 1943
☒ 3. 1941
☒ 4. 1940

Question ID : 630680194297
Status : Not Answered
Chosen Option : --

Q.2 Which of the following businesses/banking organisations was established by the Indian Business Community in 1927?

- Ans
- ☒ 1. Allahabad Bank
 - ☒ 2. FICCI
 - ☒ 3. CIBS
 - ☒ 4. Punjab National Bank

Question ID : 630680194298
Status : Not Answered
Chosen Option : --

Q.3 Who is responsible for regulating the debates and proceedings of the Vidhan Sabha?

- Ans
- ☒ 1. Speaker
 - ☒ 2. Chief minister
 - ☒ 3. Deputy speaker
 - ☒ 4. Governor

Question ID : 630680194310
Status : Answered
Chosen Option : 1

Q.4 Article 149 deals with which of the following?

- Ans
- ☒ 1. CAG appointment, oath and conditions of service
 - ☒ 2. Duties and Powers of the CAG
 - ☒ 3. The form of accounts of the Union and of the States
 - ☒ 4. Audit Reports

Question ID : 630680194313
Status : Answered
Chosen Option : 2

Q.5 In a production function, which of the following is NOT a factor of production?

- Ans
- ☒ 1. Output
 - ☒ 2. Capital
 - ☒ 3. Land
 - ☒ 4. Labour

Question ID : 630680194301
Status : Not Answered
Chosen Option : --

Q.6 In October 2022, IMF cut India's Gross Domestic Product Growth projection for 2022-23 to _____ from the earlier 7.4%.

- Ans
- ☒ 1. 8.2%
 - ☒ 2. 4.5%
 - ☒ 3. 6.8%
 - ☒ 4. 3.1%

Question ID : 630680194300
Status : Not Answered
Chosen Option : --

Q.7 In which year was the All India Kisan Sabha, a peasant organisation, founded?

- Ans ☒ 1. 1942
- ☒ 2. 1936
- ☒ 3. 1940
- ☒ 4. 1938

Question ID : 630680194299
Status : Not Answered
Chosen Option : --

Q.8 Which of the following dynasties could continue to maintain their hold over Kannauj till the end in the Tripartite Struggle?

- Ans ☒ 1. Pala
- ☒ 2. Rashtrakuta
- ☒ 3. Gurjara-Pratihara
- ☒ 4. Chola

Question ID : 630680194295
Status : Answered
Chosen Option : 4

Q.9 The Vidhan Sabha can ask the President to create or dissolve the Vidhan Parishad if it has majority of_____.

- Ans ☒ 1. 1/2
- ☒ 2. 1/4
- ☒ 3. 1/3
- ☒ 4. 2/3

Question ID : 630680194311
Status : Not Answered
Chosen Option : --

Q.10 What is the literacy rate of Lakshadweep as per the 2011 Census?

- Ans ☒ 1. 95.26%
- ☒ 2. 91.85%
- ☒ 3. 89.84%
- ☒ 4. 85.13%

Question ID : 630680194303
Status : Not Answered
Chosen Option : --

Q.11 In the Zabti system during the Mughal Empire, the land which had been continuously cultivated was named_____.

- Ans ☒ 1. Banjar
- ☒ 2. Parauti
- ☒ 3. Polaj
- ☒ 4. Chachar

Question ID : 630680194296
Status : Not Answered
Chosen Option : --

Q.12 In which language are the proceedings of the Supreme Court conducted?

- Ans ☒ 1. English
- ☐ 2. Regional Language of States
- ☐ 3. Hindi
- ☐ 4. Both English and Hindi

Question ID : 630680194312
Status : Answered
Chosen Option : 1

Q.13 What is the sex ratio of Puducherry as per the 2011 Census?

- Ans ☐ 1. 967
- ☐ 2. 1027
- ☐ 3. 987
- ☒ 4. 1037

Question ID : 630680194304
Status : Not Answered
Chosen Option : --

Q.14 Goods and Services Tax (GST) is a/an:

- Ans ☐ 1. wealth tax
- ☐ 2. capital gains tax
- ☒ 3. indirect tax
- ☐ 4. direct tax

Question ID : 630680194306
Status : Answered
Chosen Option : 3

Q.15 Which of the following Chapters of the Indian Constitution talks about the Constitution of Parliament?

- Ans ☐ 1. Chapter I
- ☐ 2. Chapter III
- ☐ 3. Chapter IV
- ☒ 4. Chapter II

Question ID : 630680194294
Status : Not Answered
Chosen Option : --

Q.16 Which of the following is a right bank tributary of the Indus?

- Ans ☒ 1. Hunza
- ☐ 2. Zaskar
- ☐ 3. Beas
- ☐ 4. Jhelum

Question ID : 630680194302
Status : Not Answered
Chosen Option : --

Q.17 Article 21 of the Indian Constitution deals with:

- Ans ☒ 1. Right to Vote
- ☒ 2. Protection of Life and Personal Liberty
- ☒ 3. Child Labour
- ☒ 4. Widow Marriage

Question ID : 630680194305
Status : Answered
Chosen Option : 2

Q.18 Which of the following is a thermal power station of Uttar Pradesh?

- Ans ☒ 1. Sasan Ultra Mega Power Plant
- ☒ 2. Rihand Thermal Power Station
- ☒ 3. Talcher Super Thermal Power Station
- ☒ 4. Tiroda Thermal Power Plant

Question ID : 630680194307
Status : Not Answered
Chosen Option : --

Q.19 Which Amendment of the Indian Constitution is called 'Mini Constitution' because of the large number of revisions it made to the Constitution of India?

- Ans ☒ 1. 42
- ☒ 2. 61
- ☒ 3. 44
- ☒ 4. 52

Question ID : 630680194309
Status : Answered
Chosen Option : 3

Q.20 Which district of Arunachal Pradesh is the least populated district of India as per Census 2011?

- Ans ☒ 1. Dibang Valley
- ☒ 2. Changlang
- ☒ 3. Anjaw
- ☒ 4. Itanagar

Question ID : 630680194308
Status : Not Answered
Chosen Option : --